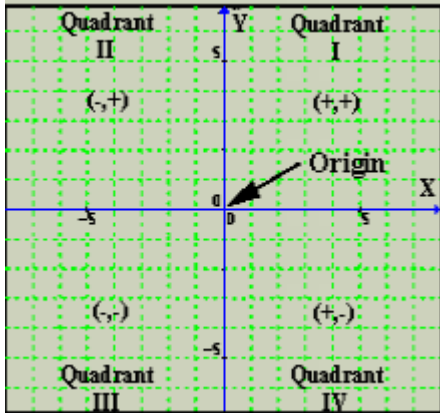


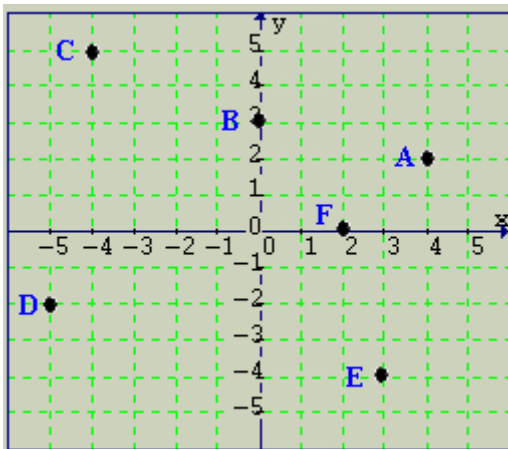
2-1 Coordinate Plane



An ordered pair (x, y) is the name of a location on a graph.

$(2, 3)$ 2 is called the x-coordinate and 3 is called the y-coordinate

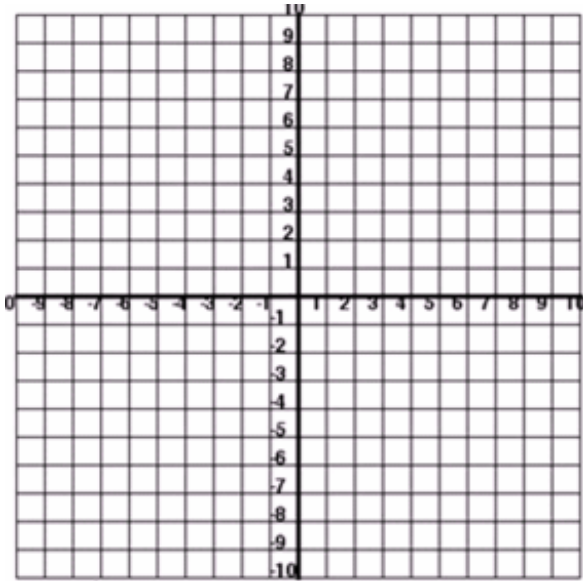
Name the coordinates of each ordered pair.



Plot each ordered pair on the graph below:

A(3, 7) B(0, -8) C(2, 1) D(-4, 2)

E(6, 0) F(-3, -5) G(2, -2)



Tell which quadrant or axis each point lies:

